

Practise: The Sine and Cosine Ratios

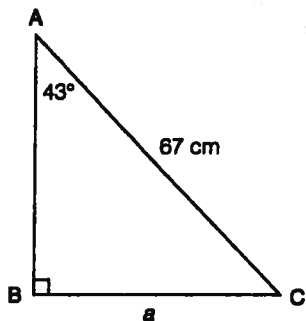
1. Use a scientific calculator to find each value. Round to four decimal places.

- a) $\cos 75^\circ$ _____ b) $\sin 12^\circ$ _____ c) $\sin 53^\circ$ _____
 d) $\cos 8^\circ$ _____ e) $\sin 66^\circ$ _____ f) $\cos 81^\circ$ _____

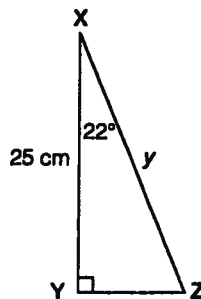
2. Use a scientific calculator to find the angle measure in each of the following. Round to the nearest degree.

- a) $\sin X = 0.1636$ _____ b) $\sin A = 0.9386$ _____ c) $\cos Y = 0.2232$ _____
 d) $\cos F = 0.5867$ _____ e) $\sin B = 0.4587$ _____ f) $\cos K = 0.6892$ _____

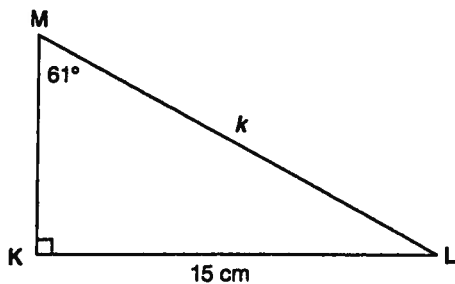
3. In the following right triangles, find the measure of the indicated side. Round to the nearest centimetre.



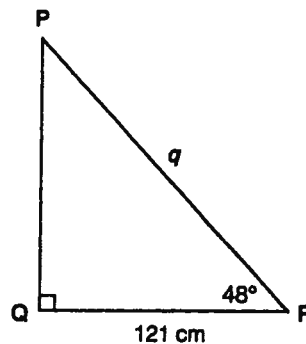
a) $a =$ _____



b) $y =$ _____



c) $k =$ _____



d) $q =$ _____